

HHS AP Human Geography
 Regional Focus-North America/United States, Canada, & Greenland
 Map Quiz SY 16-17

Name: _____

Date: _____

Period: _____

<p>Political Features</p> <p>States</p> <ul style="list-style-type: none"> • Canada • Greenland (Denmark) • United States <p>Cities</p> <p><u>Greenland:</u></p> <ul style="list-style-type: none"> • Nuuk (Godthaab) (capital) <p><u>Canada:</u></p> <ul style="list-style-type: none"> • Ottawa (capital) • Quebec • Montreal • Toronto • Vancouver <p><u>United States:</u></p> <ul style="list-style-type: none"> • Washington, D.C. • Boston • New York • Philadelphia • Baltimore • San Francisco • Los Angeles • San Diego • Chicago • Detroit • Cleveland • Pittsburgh • Houston • Phoenix • Atlanta • Miami • Dallas <p>United States</p> <ul style="list-style-type: none"> • Alaska • Hawaii <p>Northeast:</p> <ul style="list-style-type: none"> • Connecticut • Maine • Massachusetts • New Hampshire • New York • New Jersey 	<p>Political Features, continued:</p> <p>Northeast, cont.</p> <ul style="list-style-type: none"> • Pennsylvania • Rhode Island • Vermont <p>Southeast</p> <ul style="list-style-type: none"> • Alabama • Arkansas • Delaware • Florida • Georgia • Kentucky • Louisiana • Maryland • Mississippi • North Carolina • South Carolina • Tennessee • Virginia • West Virginia <p>Midwest</p> <ul style="list-style-type: none"> • North Dakota • South Dakota • Nebraska • Kansas • Minnesota • Iowa • Missouri • Wisconsin • Illinois • Indiana • Ohio • Michigan <p>West</p> <ul style="list-style-type: none"> • Washington • Oregon • Idaho • Montana • Wyoming • Colorado • Utah • Nevada • California 	<p>Political Features, continued:</p> <p>Southwest</p> <ul style="list-style-type: none"> • Arizona • New Mexico • Texas • Oklahoma • <p>Canadian Provinces and Territories</p> <ul style="list-style-type: none"> • Alberta • British Columbia • Manitoba • New Brunswick • Newfoundland and Labrador • Northwest Territories • Nova Scotia • Nunavut • Ontario • Prince Edward Island • Quebec • Saskatchewan • Yukon Territory <p>Physical Features</p> <ul style="list-style-type: none"> • Mississippi River • Colorado River • Rio Grande • Gulf of Mexico • Great Lakes • Arctic Ocean • Pacific Ocean • Atlantic Ocean • Appalachian Mts. • Rocky Mts.
---	--	---

This country cropped for space considerations

This land cropped for space considerations

North America

For a map test of the Caribbean Island Countries see our separate test for the area!

Name the Country!

1 _____	4 _____	7 _____	10 _____
2 _____	5 _____	8 _____	11 _____
3 _____	6 _____	9 _____	

Regional focus: North America
Greenland, Canada and the United States and their capital cities

Objective: Students will be able to identify and label the United States, Canada and Greenland and their capital cities

Note: THESE ARE THE ONLY ONES YOU NEED TO LABEL (for now, at least.....you'll be seeing this map again!)

TASK #1: CLEARLY label the following countries in North America-CANADA, GREENLAND AND THE U.S.

TASK #2: CLEARLY mark, identify & label the capital cities of the US, Greenland and Canada.

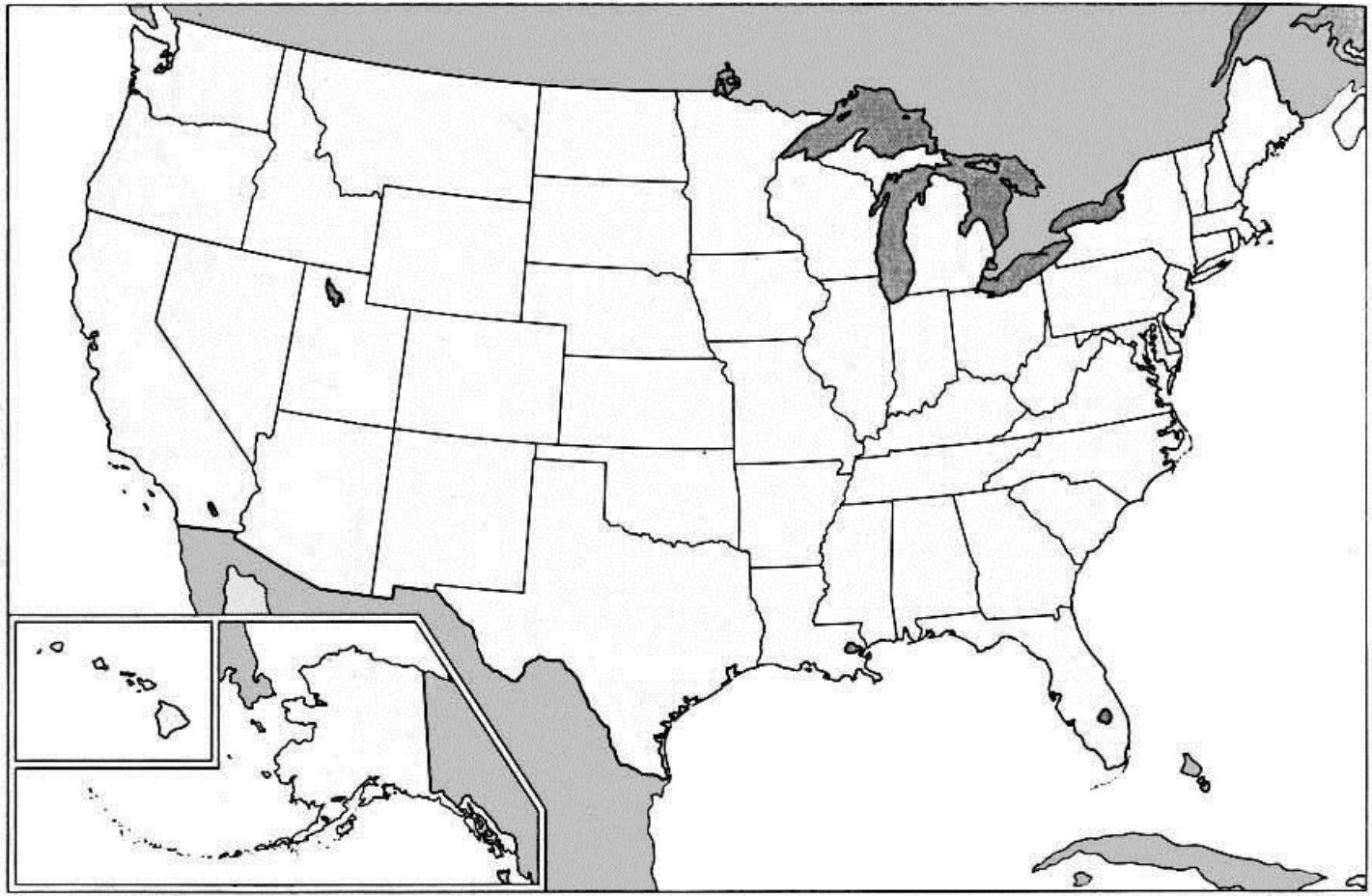
Canada

Regional focus: North America
Canadian Provinces and Territories



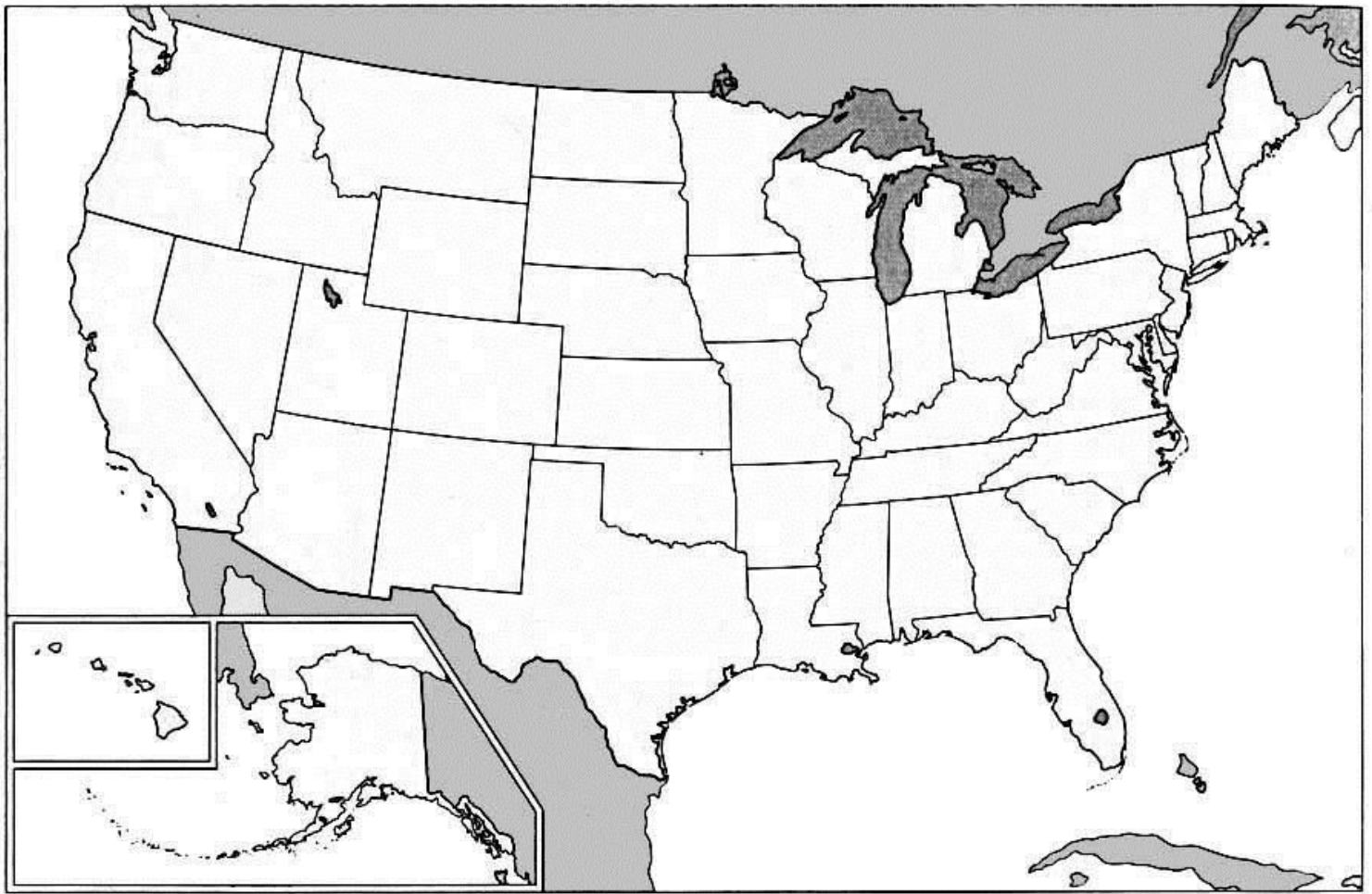
Name the Province or Territory

- | | | | | | |
|---|-------|---|-------|----|-------|
| 1 | _____ | 5 | _____ | 9 | _____ |
| 2 | _____ | 6 | _____ | 10 | _____ |
| 3 | _____ | 7 | _____ | 11 | _____ |
| 4 | _____ | 8 | _____ | 12 | _____ |
| | | | | 13 | _____ |



Objective: Students will be able to identify and label a selection of states comprising the United States when provided a blank map of the United States.

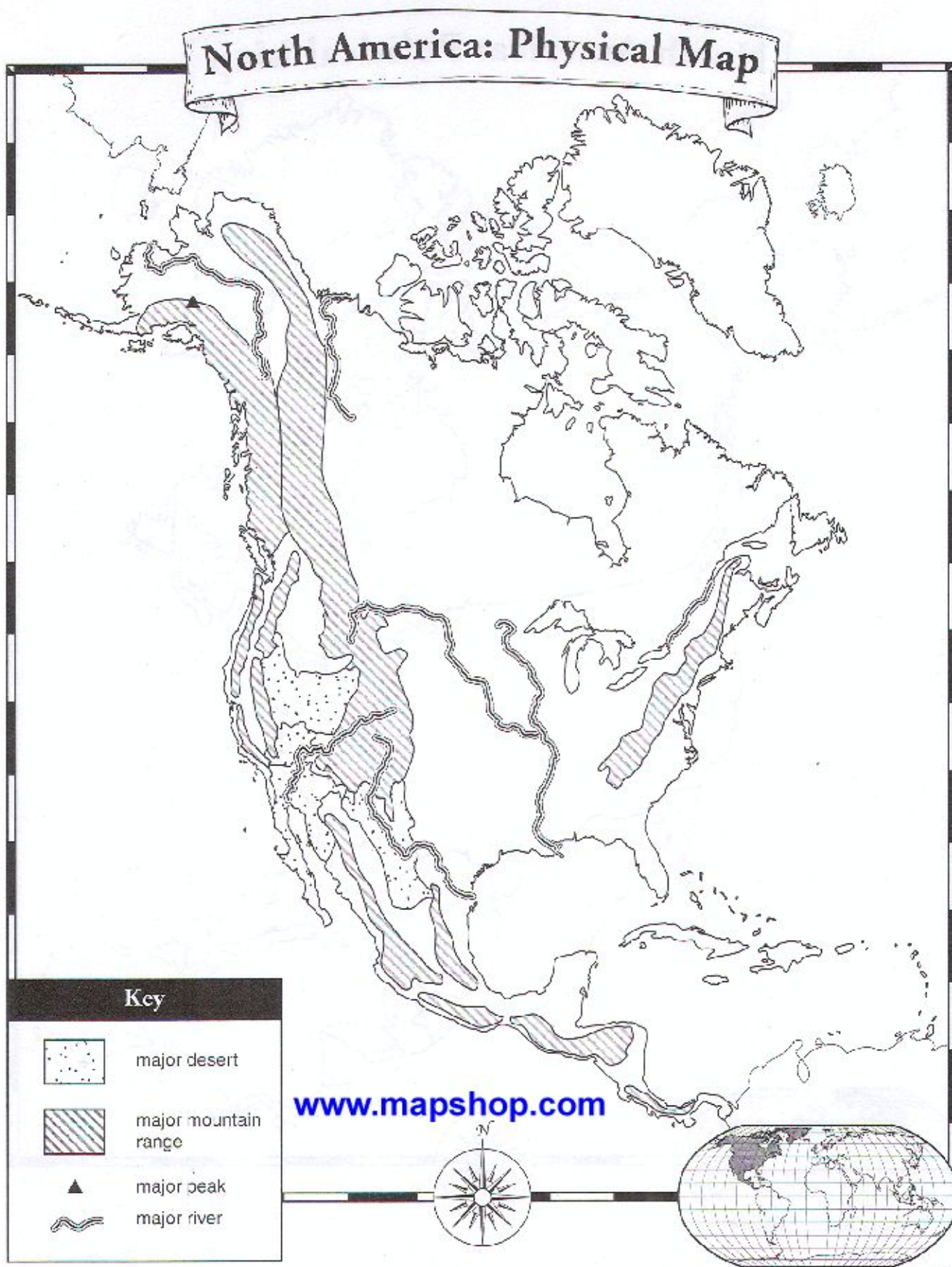
TASK: Identify all of the 50 states. CLEARLY label each of the states. I have included a zoomed in section of the northeast for you.



Objective: Students will be able to identify and label a selection of cities in the US and Canada.

TASK: Identify the listed cities in Canada & the United States

Regional focus: North America
US and Canada: Cities



Objective: Students will be able to identify and label physical features of North America.

TASK: Identify and/or label the features on the above map.